

Here are four calculations.

Which one is the easiest to answer?

Which one is the trickiest to answer?

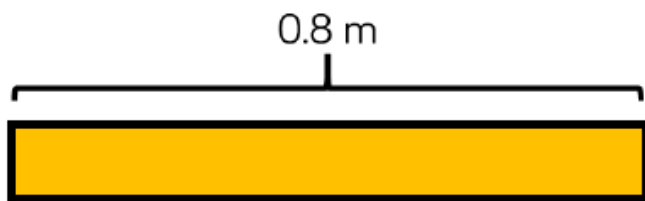

Explain your choice of order.

$$0.45 - 0.3 =$$

$$0.45 - 0.15 =$$

$$0.45 - 0.23 =$$

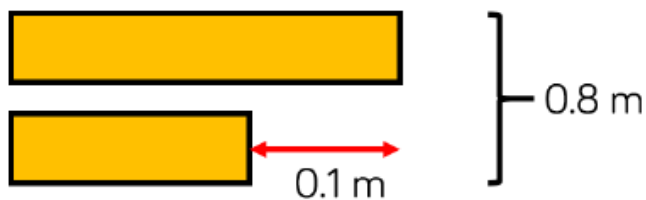
$$0.45 - 0.18 =$$



The strip of paper is 0.8 m long.

It is cut into two unequal parts.

The difference in lengths between the two strips of paper is 0.1 m



How long are the two strips of paper?

